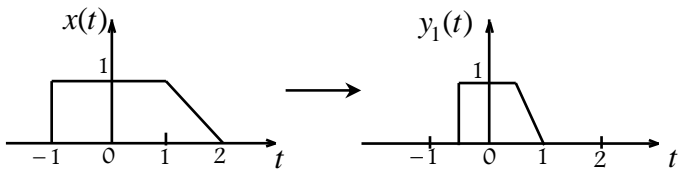


ΑΣΚΗΣΗ 1.12.

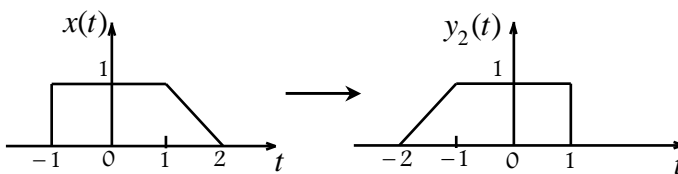
Σημειώστε τη μετατροπή ή τις μετατροπές, που πρέπει να κάνουμε στο σήμα $x(t)$, ώστε να δημιουργηθούν τα σήματα $y_k(t)$, για $k = 1, 2, \dots, 5$.



.....

.....

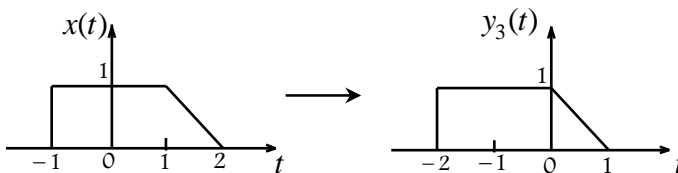
.....



.....

.....

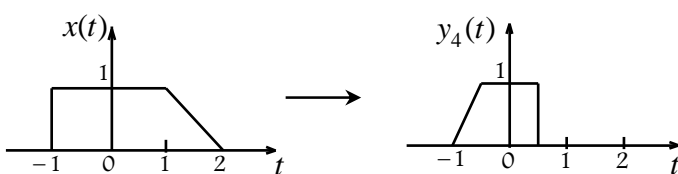
.....



.....

.....

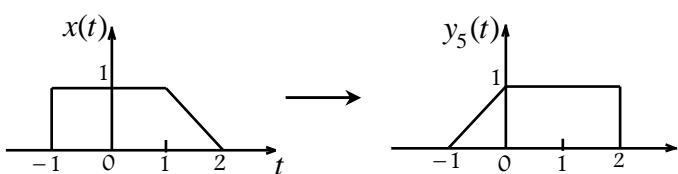
.....



.....

.....

.....



.....

.....

.....